


Maths Word Problems

Challenge Cards



Maths Word Problems

1. Tom had 7 marbles. Sam gave him 5 more marbles. How many marbles does Tom have now?



Maths Word Problems

2. Niamh has 19 flowers. She gave 4 of them to Ruby. How many flowers does Niamh have now?




Maths Word Problems

3. There were 12 birds in a tree. 4 more birds came along to join them. How many birds are in the tree?




Maths Word Problems

4. Jake ate 4 slices of pizza. Mary ate 5 slices of pizza. How many slices of pizza were eaten?



Maths Word Problems

5. Sophia collected 17 sea shells. She gave 5 of them to Amy. How many sea shells does Sophia have now?



Maths Word Problems

6. Stephen found 6 coins in his pocket on Monday. He found another 9 coins in his bag on Tuesday. How many coins does Stephen have altogether?



Maths Word Problems

7. Simon baked 14 cookies in the oven. He ate 3 of them. How many cookies were left?




Maths Word Problems

8. Sarah counted 8 leaves on the ground. She saw 6 more leaves fall to the ground. How many leaves are now on the ground?



Maths Word Problems

9. There were 11 people on the bus. 7 more people got on the bus. How many people are now on the bus?




Maths Word Problems

10. John had 8 sweets. Mark gave him 8 more. How many sweets does John have now?



Maths Word Problems

11. There are 12 cows and 6 sheep in a field. How many animals are in the field?



Maths Word Problems

12. There were 19 people on the bus. 5 people got off the bus. How many people are left?



Maths Word Problems

13. Harry ran 5 kilometres. He walked for another 6 kilometres. How far did Harry travel?



Maths Word Problems

14. Chloe baked 20 cupcakes for her friends. She gave 14 of the cupcakes away. How many had she left?



Maths Word Problems

15. Monica saw 11 butterflies. Then she saw another 6 butterflies. How many butterflies did she see altogether?




Maths Word Problems

16. There were 13 children playing football. Another 6 children joined the game. How many children were playing football?




Maths Word Problems

17. Gary counted 14 fish in a fish tank. 5 more were put in. How many fish are in the tank in total?



Maths Word Problems

18. There were 18 rabbits in a field. 9 of them ran away. How many were left?




Maths Word Problems

19. Jamie had 4 red balloons. Rachel had 8 blue balloons. How many balloons did they have in total?




Maths Word Problems

20. Fern had 12 pieces of chocolate. She gave 5 pieces away. How many pieces did she have left?



Maths Word Problems

21. There were 20 bottles of water on a shelf. 13 of them were taken off the shelf. How many were left?




Maths Word Problems

22. Harriet counted 12 people waiting for a bus. 6 more people arrived. How many people were waiting for the bus altogether?




Maths Word Problems

23. Frank planted 7 trees in his garden. The next summer he planted 8 more. How many trees did he plant altogether?




Maths Word Problems

24. George had €14. He spent €9 on a new toy.
How much does he have left?



Maths Word Problems

25. There were 19 pencils in a jar. 5 of them were
taken out of the jar. How many were left?



Answers

- | | |
|------------------|--------------------|
| 1. 12 marbles | 13. 18 kilometres |
| 2. 15 flowers | 14. 11 cupcakes |
| 3. 16 birds | 15. 19 butterflies |
| 4. 9 pizza | 16. 17 children |
| 5. 12 sea shells | 17. 9 fish |
| 6. 15 coins | 18. 19 rabbits |
| 7. 11 cookies | 19. 17 balloons |
| 8. 14 leaves | 20. 12 pieces |
| 9. 16 people | 21. 7 bottles |
| 10. 18 sweets | 22. 6 people |
| 11. 14 animals | 23. 15 trees |
| 12. 18 people | 24. €5 |
| | 25. 14 pencils |